
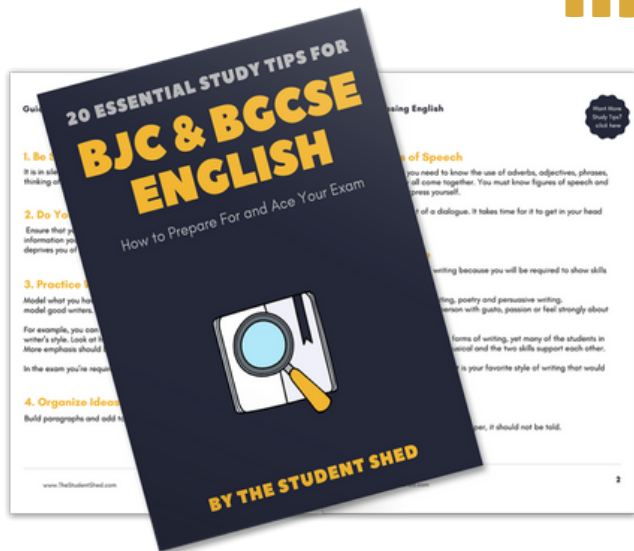


student **BJC** exam
Past Paper Booklet
Social Studies




More resources you might like...



Free BJC & BGCSE English Study Tips

[LEARN MORE](#)




Free Math Q & A Review Book

[LEARN MORE](#)



Free Homeschool Workshop


[LEARN MORE](#)



Free Primary Social Studies Activity Book

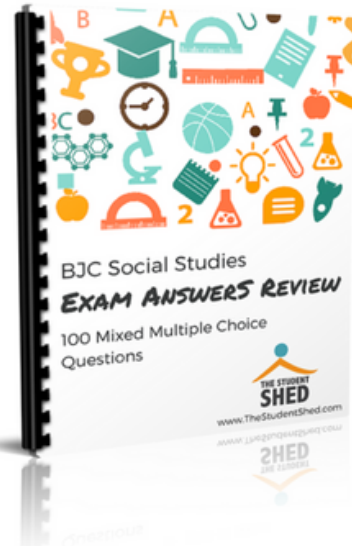
[LEARN MORE](#)

More resources you might like...




BJC General Science Answer Book (MCQ)

[LEARN MORE](#)




BJC Social Studies Answer Book

[LEARN MORE](#)



BJC Mathematics Answer Book

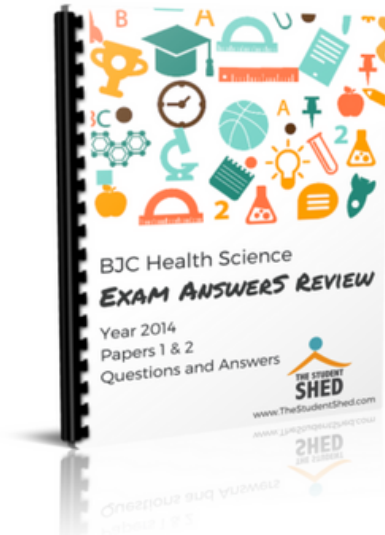
[LEARN MORE](#)



BJC General Science Answer Book


[LEARN MORE](#)

More resources you might like...



BJC Health Science Answer Book

[LEARN MORE](#)



BGCSE Mathematics Answer Book

[LEARN MORE](#)



BGCSE Combined Science Answer Book

[LEARN MORE](#)



BGCSE Biology Answer Book

[LEARN MORE](#)

More resources you might like...



BJC & BGCSE On-Demand Pre-recorded Courses

[LEARN MORE](#)



Primary School Courses

[LEARN MORE](#)

DISCLAIMER

This document consist of scanned copies of the BGCSE and/or BJC past papers produced by the Bahamas Ministry of Education. The Student Shed accepts no responsibility or liability for the contents within this document, including but not limited to; answers that may be highlighted, missing papers or missing questions.

It is the sole responsibility of the user to determine the correct and most suitable answers for each question contained therein.

0065/2**BJC**

FOR EXAMINERS' USE ONLY	
TOTAL MARKS	MARK
A	
B	
C	
D	
TOTAL	

SCHOOL No.	CANDIDATE No.
INITIALS	SURNAME

**MINISTRY OF EDUCATION
BAHAMAS JUNIOR CERTIFICATE
EXAMINATION 2019**

0065 SOCIAL STUDIES

**PAPER 2
(100 Marks)**

Thursday **30 May 2019** 1:00 P.M.–3:00 P.M.

INSTRUCTIONS TO CANDIDATES

Write your school number, candidate number, initials and surname in the spaces provided on the question booklet.

For Section A circle the letter which represents the correct answer in the booklet.

Answer **ALL** questions in Sections B and C in the spaces provided in the question booklet.

There are **FIVE** source-based questions in Section D. Answer question **D1** and **TWO** other questions in the spaces provided. The questions are divided into several parts.



This question paper consists of 23 printed pages and 1 blank page.

SECTION A
MULTIPLE CHOICE (50 MARKS)

INSTRUCTIONS:

Circle the letter which represents the correct answer in this booklet. Each correct answer is worth 1 mark.

1. Which direction is not a Cardinal Point?
 - A. East
 - B. Northeast
 - C. North
 - D. South

2. An instrument used for measuring time is the _____.
 - A. Compass
 - B. Hour glass
 - C. Log
 - D. Quadrant

3. The study of the solar system and its function is called?
 - A. Astronomy
 - B. Cartography
 - C. Geology
 - D. Meteorology

4. The type of map one would use to find where people reside
 - A. Contour
 - B. Physical
 - C. Political
 - D. Thematic

5. On which Continent can the Atlas Mountain be found?
 - A. Africa
 - B. Europe
 - C. North America
 - D. South America

6. Which of the following countries is not an island nation?
 - A. The Bahamas
 - B. Dominica
 - C. Guyana
 - D. Jamaica



7. The instrument used to measure air pressure is a...

- A. Anemometer
- B. Barometer
- C. Hydrometer
- D. Thermometer

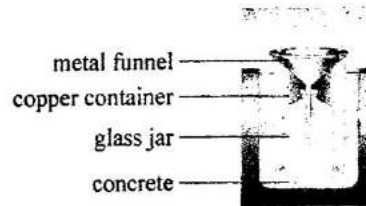


Fig. 1

What is the name of the weather instrument in Figure 1?

- A. Anemometer
- B. Barometer
- C. Rain Gauge
- D. Wind Vane

9. What does this P.O. symbol represents on a map?

- A. Personnel Officer
- B. Post Office
- C. Postal Order
- D. Putout

10. Which **TWO** planets are the largest in our solar system?

- A. Earth and Saturn
- B. Jupiter and Neptune
- C. Saturn and Jupiter
- D. Mars and Venus

11. The best way to describe the climate of The Bahamas is _____

- A. Frigid
- B. Polar
- C. Subtropical
- D. Temperate

12. The body of water located between Florida and The Bahamas is called the _____

- A. Bight of Acklins
- B. Northeast Providence Channel
- C. Old Bahama Channel
- D. Straits of Florida



13. The Capital of The Bahamas is _____
- A. Freeport
 - B. George Town
 - C. Marsh Harbour
 - D. Nassau
14. The distance of the sun from the Earth is about _____
- A. 36,000,000 ml.
 - B. 67,250,000 ml.
 - C. 92,950,000 ml.
 - D. 141,500,000 ml.
15. One complete turn around the Sun is called _____
- A. Atoll
 - B. Orbit
 - C. Rotation
 - D. Revolution
16. Which island in The Bahamas has the highest elevation?
- A. Bimini
 - B. Cat Island
 - C. Exuma
 - D. Rum Cay
17. The "slash and burn" method is practiced in which area?
- A. Banking
 - B. Farming
 - C. Fishing
 - D. Tourism
18. What was the Arawaks name for San Salvador?
- A. Fernandina
 - B. Guanahani
 - C. Guanin
 - D. Watlings Island
19. Which Amerindian Chief prophesied the doom of the Arawaks?
- A. Cacibu
 - B. Chac
 - C. Guacito
 - D. Oubouthan



20. The Arawaks called their heaven
- A. Arieto
 - B. Batos
 - C. Cohoba
 - D. Coyaba
21. The Arawaks flattened the heads of their babies for _____
- A. Initiation
 - B. Migration
 - C. Protection
 - D. Spiritualism
22. Which settlement in Abaco is famous for its boat building?
- A. Elbow Cay
 - B. Man-of-War Cay
 - C. Samana Cay
 - D. Treasure Cay
23. The first Bahamian Newspaper was started by _____
- A. Andrew Deveau
 - B. Edwin Moseley
 - C. Grey Charlton
 - D. John Wells
24. What was the main reason for Christopher Columbus voyage to the New World?
- A. New sea route to the east
 - B. Precious gems
 - C. Religious exploration
 - D. Territory expansion
25. What name did Columbus give Long Island on His first voyage to the New World?
- A. Fernandina
 - B. Isabella
 - C. La-Rose
 - D. Santa Maria de la Concepcion
26. Which group introduced Wrecking to The Bahamas?
- A. The Arawaks
 - B. The Buccaneers
 - C. The Eleutheran Adventurers
 - D. The Pirates



27. Wrecking is the _____.
- A. Gathering of Sponges
 - B. Raking of salt
 - C. Restoring the ships
 - D. Salvaging of goods
28. What was the name of Nassau's first Newspaper?
- A. The Bahama Journal
 - B. The Gazette
 - C. The Nassau Guardian
 - D. The Tribune
29. Which group of people wanted to remain loyal to Britain?
- A. The Africans
 - B. The Buccaneers
 - C. The Eleutheran Adventurers
 - D. The Loyalists
30. Which group of settlers introduced Junkanoo to The Bahamas?
- A. African slaves
 - B. Europeans
 - C. Queen Victoria
 - D. Spanish
31. What is another name for Vendue House, located on the Island of New Providence?
- A. Carmichael House
 - B. Fitzwilliam House
 - C. Phenny House
 - D. Pompey Museum
32. When were slaves emancipated in The Bahamas?
- A. 1804
 - B. 1838
 - C. 1962
 - D. 1967
33. How many Lord Proprietors rented The Bahamas?
- A. 2
 - B. 4
 - C. 6
 - D. 8



34. In which year did the Eleutheran Adventures come to The Bahamas?
- A. 1624
 - B. 1638
 - C. 1648
 - D. 1652
35. Who was The Bahamas' first Premier?
- A. Arthur D. Hanna
 - B. Lynden Pindling
 - C. Milo Butler
 - D. Roland Symonette
36. The word Premier was changed to _____ in 1969.
- A. Chancellor
 - B. President
 - C. Prime Minister
 - D. Speaker
37. When does the budget year begin and end?
- A. July 1st to June 30th
 - B. Sept 6th to August 31st
 - C. January 2nd to December 31st
 - D. May 31st to April 30th
38. In 1964 the Executive Council was changed to _____.
- A. The Cabinet
 - B. The Lower House
 - C. The Opposition
 - D. The Senate
39. How many houses make up The Bahamian Parliament?
- A. One
 - B. Two
 - C. Three
 - D. Four
40. Who designed the National flag of The Bahamas?
- A. Dame Doris Johnson
 - B. Dr. Hervis Bain
 - C. Dr Philip Rahming
 - D. Sir Milo Butler



41. Citizens who live in a democracy would be least likely to have _____.
A. forced voting
B. freedom of press
C. freedom of speech
D. freedom of worship
42. Why are the Members of Parliament more important than the members of the Senate?
A. they are appointed
B. they are elected
C. they are nominated
D. they are ordained
43. Which official reads the Speech from the Throne?
A. The Commissioner of Police
B. The Commodore of the Defence Force
C. The Governor General
D. The Prime Minister
44. The amount of money the government plans to spend for the Country is outlined in a _____.
A. budget
B. expenditure
C. revenue
D. taxes
45. In which court would you expect an individual under the age of 18 years to be tried?
A. Civil
B. Juvenile
C. Magistrates
D. Supreme
46. Which individual is referred to as the "Father of Labour" in The Bahamas?
A. John Pinder
B. Leonard Archer
C. Sir Milo Butler
D. Sir Randol Fawkes
47. The composition of the Senate is _____.
A. 14
B. 15
C. 16
D. 17



48. The party with the 'least' amount of seats in the House of Assembly form the _____.

- A. Cabinet
- B. Government
- C. Opposition
- D. Senate

49. What is the Symbol of Authority in the House of Assembly?

- A. The hour glass
- B. The Mace
- C. The Sergeant-at-Arms
- D. The Speaker

50. Trade Unions help to negotiate for the _____.

- A. Employer
- B. Government
- C. Opposition
- D. Workers

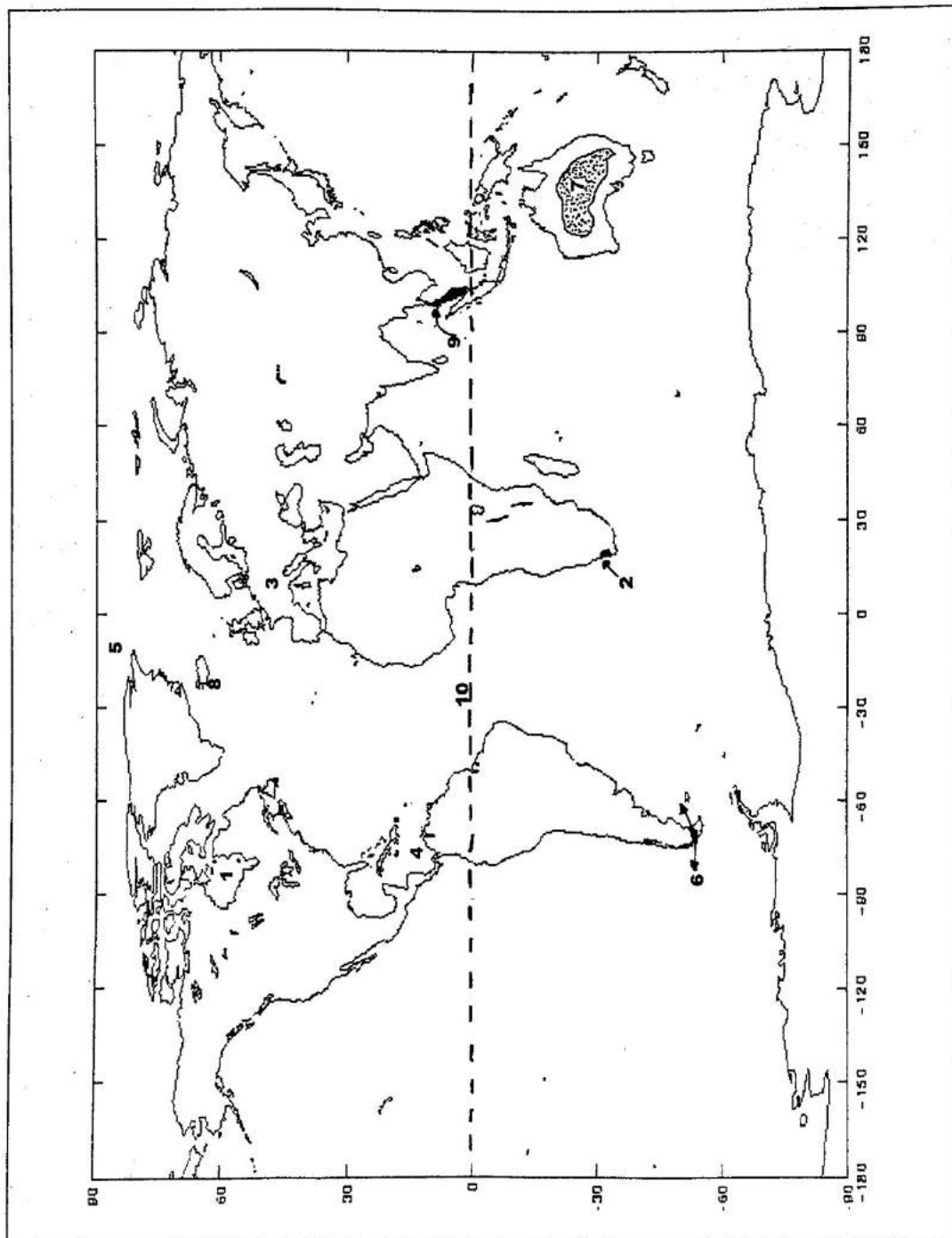


SECTION B

MATCHING MAP WORK (10 MARKS)

INSTRUCTIONS:

Look at the Map of The World and match the correct letter in **Column B** with the correct number in **Column A**. Each correct answer is worth one (1) mark.



Column A

- | | | |
|-----|-------|-----------|
| 1. | _____ | Bay |
| 2. | _____ | City |
| 3. | _____ | Continent |
| 4. | _____ | Sea |
| 5. | _____ | Ocean |
| 6. | _____ | Strait |
| 7. | _____ | Desert |
| 8. | _____ | Island |
| 9. | _____ | Peninsula |
| 10. | _____ | Line |

Column B

- | | |
|----|----------------|
| A. | Malaysia |
| B. | Caribbean |
| C. | Magellan's |
| D. | Great Victoria |
| E. | Iceland |
| F. | Hudson |
| G. | Europe |
| H. | Arctic |
| I. | Equator |
| J. | Cape Town |
| K. | Guinea |
| L. | Himalayas |
| M. | Kalahari |
| N. | York |
| O. | Sahara |

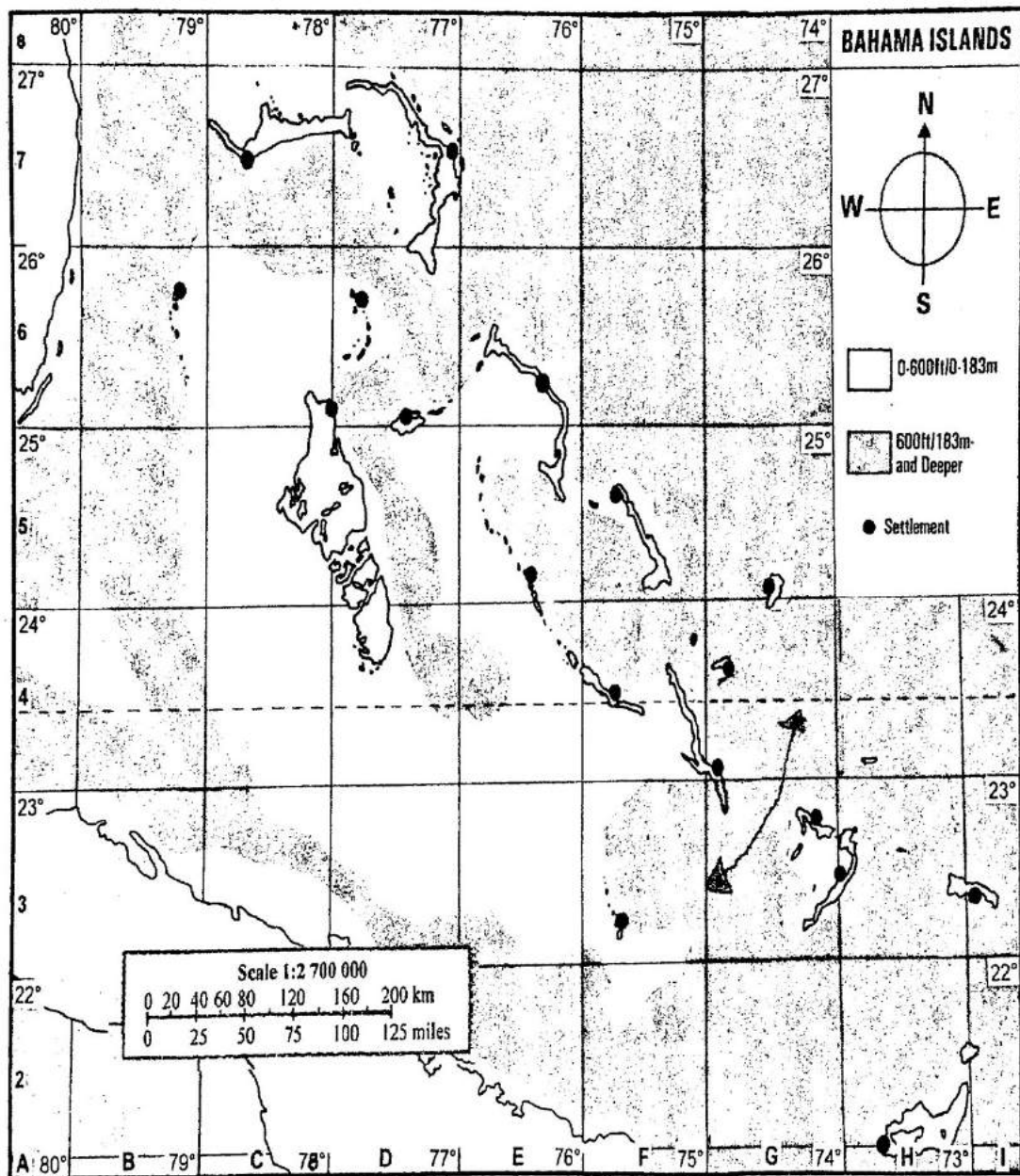


SECTION C

COMPLETION (10 MARKS)

INSTRUCTIONS:

Study the map of The Bahamas then complete the following statements by filling in the blank spaces with the correct word(s). Each correct answer is worth one (1) mark.



1. Give the name of the main settlement located 25.2° N, 78° W _____.
2. The body of water between Long Island and Crooked Island is _____.
3. Give the name of the Island North, North-East of Inagua _____.
4. Which line of longitude runs through Andros and Grand Bahama? _____.
5. The shallow body of water in square C8 is called the _____.
6. Name one island latitude $23\frac{1}{2}^{\circ}$ N runs through _____.
7. The distance from Alice Town, Bimini, to Governors Harbour, Eleuthera is _____ Miles/Km.
8. The name of the Scale shown on The Bahamas map is _____.
9. The main settlement on the island in square F5 is _____.
10. The direction from Rum Cay to North Andros is _____.



SECTION D

STRUCTURED QUESTIONS (30 MARKS)

There are **FIVE** questions in this section **D (I)**, **D (II)**, **D (III)**, **D (IV)** and **D (V)**. All Candidates must answer question **D (I)** and any other **two** questions from this section. Each question has **four** parts. The **maximum** mark for each part is shown in brackets [].

Question D (i) – Wrecking in The Bahamas

Study Sources A and B then answer **ALL** the questions.


Source A:

An account of a ship wreck on Abaco

NASSAU NEWS – WRECKS. – The Federal cruiser San Jacinto got ashore at No Name Cay Abaco, on the night of the 31st December, and was totally wrecked. The crew were all taken off by the wreckers and safely landed at Green Turtle Cay. On the same night and at the same place the brigantine (sailing ship) Princess Royal, from Bermuda, bound to this port was also wrecked. The vessel is totally lost. – Part of the cargo, it is hope, will be saved by the wreckers.

littlehousebytheferry.com

Source B: A picture of a Wrecked Ship



From: The Making of The Bahamas, Don Maples, 2004



- (a) Who introduced Wrecking to The Bahamas?

_____ [1]

- (b) What is wrecking?

_____ [2]

- (c) Wrecking became very popular. The Government passed laws to govern it. List **THREE** laws used to regulate it.

_____ [3]

- (d) *"Wrecking can be seen as a lawful way of life."*

Do you agree or disagree with this statement?

Give reasons to support your answer.

_____ [4]



Question D (ii) – Banking in The Bahamas

Study Sources C and D then answer ALL the questions.

Source C:

An account of the Banking Industry

The Bahamas' Financial Centre offers a variety of services to the international community. These services are being strengthened continuously through the Government's partnership with the private sector. The Government has reaffirmed its commitment to maintaining and improving The Bahamas' role as a sophisticated offshore finance centre, through the introduction of new and innovative legislation and the strengthening of existing legislation. The Bahamas is poised to offer opportunities to innovative, progressive investors. The financial services sector is a haven to such investors.

Geographia.com/Bahamas/investment

Source D: A picture of a Commercial Bank in The Bahamas



<https://www.google.bs>



- (a) What is the definition of the word banking?

_____ [1]

- (b) Identify **TWO** types of banks that operate in The Bahamas.

_____ [2]

- (c) The Central Bank is the most important bank in The Bahamas. List **THREE** reasons for its importance to the banking sector of our economy.

_____ [3]

- (d) *"The financial Services Industry is the second largest sector to our economy."*

Do you agree or disagree with statement?

Give reasons to support your answer.

_____ [4]



Question D (1H) – The Constitution of The Bahamas

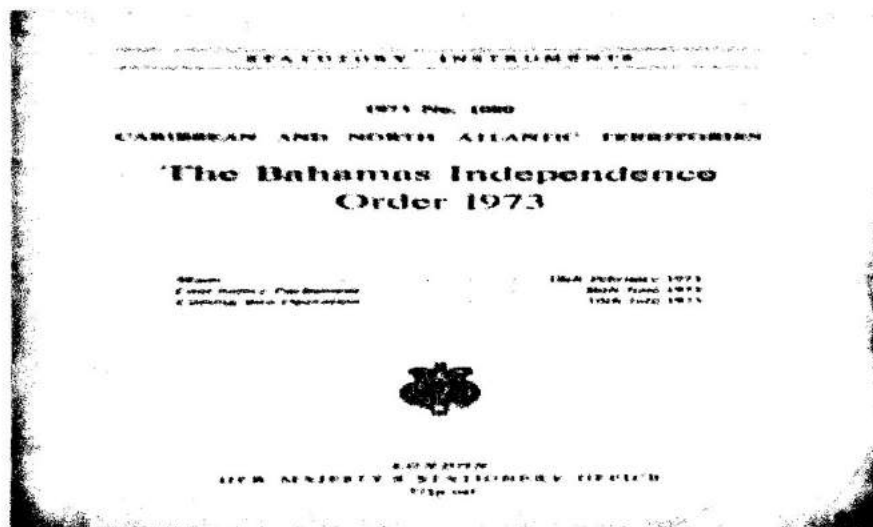
Study Sources E and F then answer ALL the questions.

Source E:

An excerpt of the fundamental rights and freedoms in The Bahamas constitution

"Whereas every person in The Bahamas is entitled to the fundamental rights and freedoms of the individual, that is to say, has the right, whatever his race, place of origin, political opinions, colour, creed or sex, but subject to respect for the rights and freedoms of others and for the public interest, to each and all of the following, namely – (a) life, liberty, security of the person and the protection of the law; (b) freedom of conscience, of expression and of assembly and association; and (c) protection for the privacy of his home and other property and from deprivation of property without compensation, the subsequent provisions of this Chapter shall have effect for the purpose of affording protection to the aforesaid rights and freedoms subject to such limitations of that protection as are contained in those provisions, being limitations designed to ensure that the enjoyment of the said rights and freedoms by any individual does not prejudice the rights and freedoms of others or the public interest."

(ous.org, 2017)

Source F: A picture of the 6th Constitutional change in The Bahamas

Weblogbahamas.com (2017)

Question D (iv) – Social Issues – Unemployment

Study Sources G and H, then answer ALL the questions.

Source G:

An account of unemployment in The Bahamas

The unemployment rate in The Bahamas and other countries is defined as the number of unemployed people as percent of the labor force. The labor force includes the people who are either employed or unemployed, i.e. who don't have a job but are actively looking for one. The labor force does not include people who are not looking for work, children, and the retired. The unemployment rate seldom declines below 4-5 percent even during boom times. There are always people who move between different sectors of the economy or between cities. When the economy goes into recession, then unemployment can reach much higher numbers, sometimes even in the double digits.

http://www.theglobaleconomy.com/Bahamas/Unemployment_rate

Source H: A picture showing job seekers in The Bahamas



www.google.bs/search?Unemployment+2014



- (a) What is a constitution?

_____ [1]

- (b) Name the First Constitution for The Bahamas and state who designed it.

_____ [2]

- (c) Describe changes of the following selected Bahamian constitutions.

The 1964 constitution	
The 1969 constitution	
The 1973 constitution	

- (d) "*The constitution of The Bahamas needs to be modernized.*"

Do you agree or disagree with this statement?

Give reasons to support your answer.

_____ [4]



- (a) Define the term unemployment

_____ [1]

- (b) List **TWO** factors that cause unemployment?

_____ [2]

- (c) Unemployment creates many social ills. Briefly describe **THREE**

_____ [3]

- (d) *"The economy of The Bahamas plays a major role in unemployment."*

Do you agree or disagree with this statement?

Give reasons for your answer.

_____ [4]




Question D (v) – The Renaissances

Study sources I and J then answer ALL the questions.

Source I:**An account of The Renaissance**

Between the mid-fourteen and mid-sixteenth centuries, the people of Europe were experiencing great changes. The old order of rule by lords, barons and kings, whose wealth and power was based upon how much land they owned, was changing and people with money were becoming more powerful.

From: John Berryman The Bahamas, Third edition 2014

Source J: The Creation of Adam

From: John Berryman The Bahamas, Third edition 2014



- (a) What does the word Renaissance mean?

 [1]

- (b) What affect did the Renaissance have on the Church?

 [2]

- (c) Using the chart below write the contributions for the following famous men of the Renaissance

FAMOUS MEN	CONTRIBUTIONS
Copernicus	
Galileo	
Michelangelo	

[3]

- (d) *"The Renaissance era brought about many changes."*

Do you agree or disagree with this statement.

Give reason for your answer.

 [4]
